

ASSIGNMENT 4
SUBJECT-MATHS

CLASS-1

Ms. Manjyot Kaur

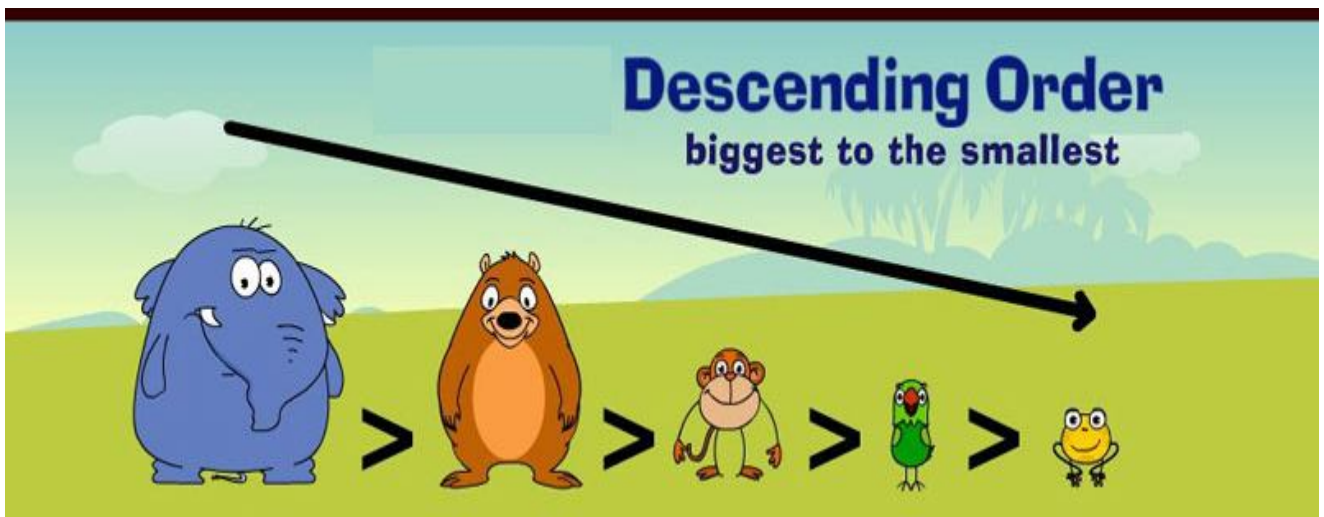
NAME- _____

Date- 21 April, 2020

TOPIC-DESCENDING ORDER

❖ Numbers are said to be in descending or decreasing order when they are arranged from the biggest to smallest.

❖ Eg.-35, 20,17,9 are arranged in descending order.



ACTIVITY TIME

Arrange the numbers in descending order and play the game.



<u>42</u>		<u>22</u>		<u>2</u>	
	<u>36</u>		<u>50</u>		<u>13</u>
<u>47</u>		<u>29</u>		<u>5</u>	

Q1. Buses, train and caterpillars need to be arranged in descending order for the circus show.

Get them ready for the show by writing the numbers below in

DESCENDING ORDER

24 26 27 25 28



41 44 43 42 40



18

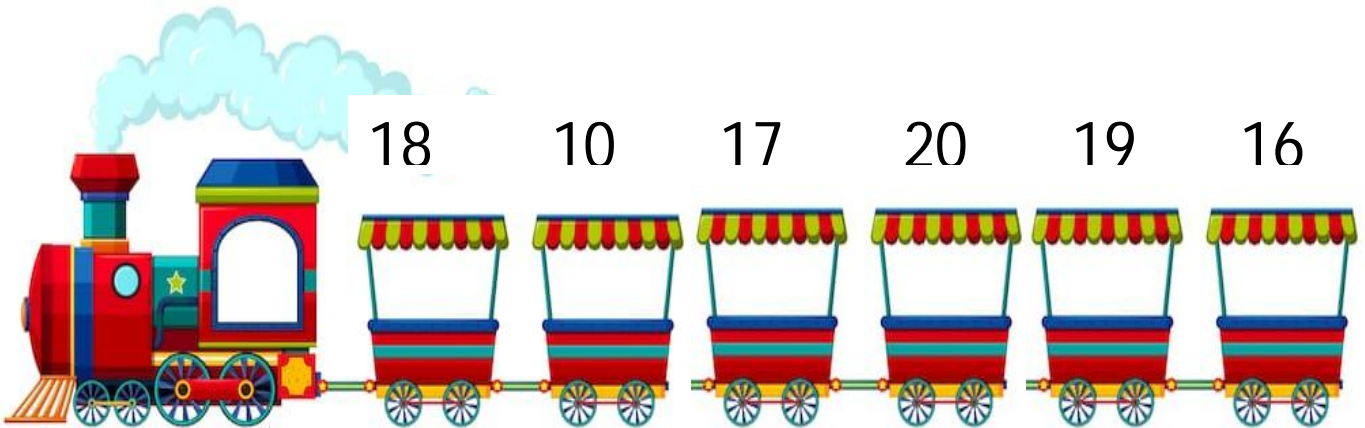
10

17

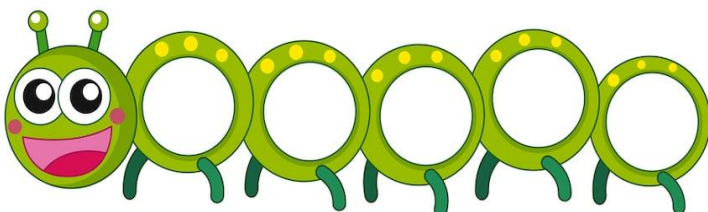
20

19

16




16 18 17 15 14



shutterstock.com • 601646078

28 26 27 25 24



shutterstock.com • 601646078